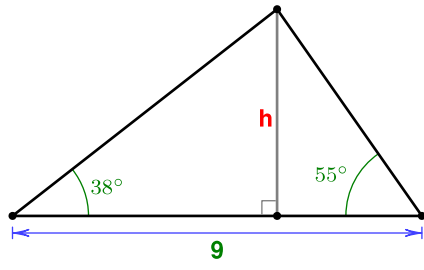
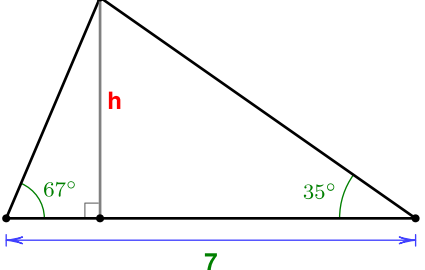
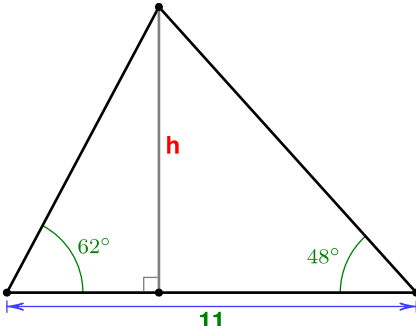
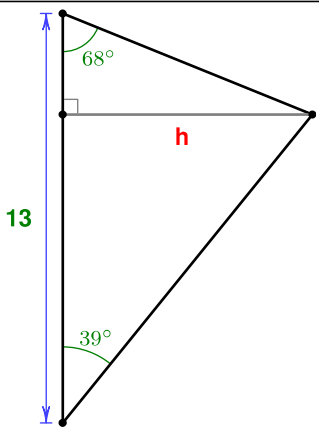
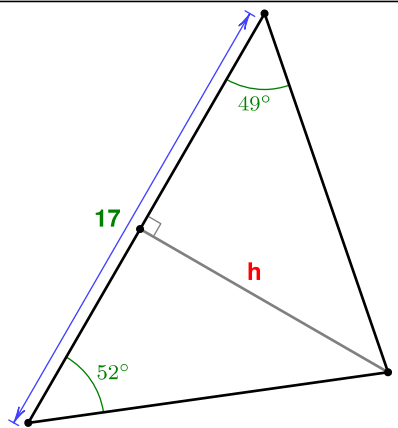
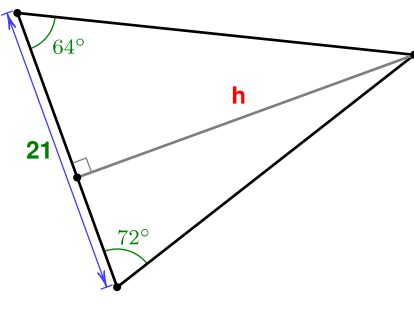
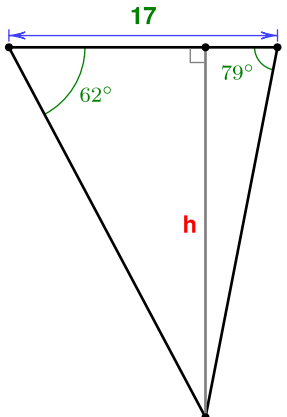
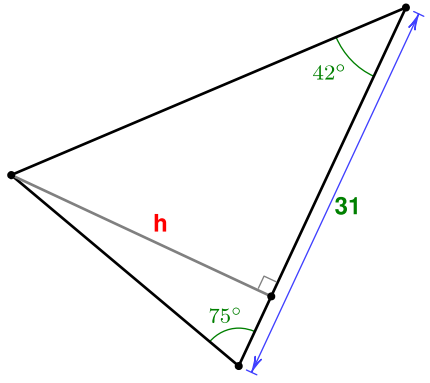
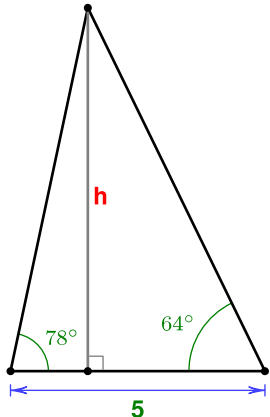


Enunciados

Calcula con cinco cifras significativas la longitud de la altura señalada en cada una de las siguientes figuras:

<p style="text-align: center;">①</p> 	<p style="text-align: center;">②</p> 	<p style="text-align: center;">③</p> 
<p style="text-align: center;">④</p> 	<p style="text-align: center;">⑤</p> 	<p style="text-align: center;">⑥</p> 
<p style="text-align: center;">⑦</p> 	<p style="text-align: center;">⑧</p> 	<p style="text-align: center;">⑨</p> 

Soluciones

① 4,5451

② 3,7784

③ 7,6810

④ 7,9320

⑤ 10,299

⑥ 25,841

⑦ 23,413

⑧ 22,487

⑨ 7,1399