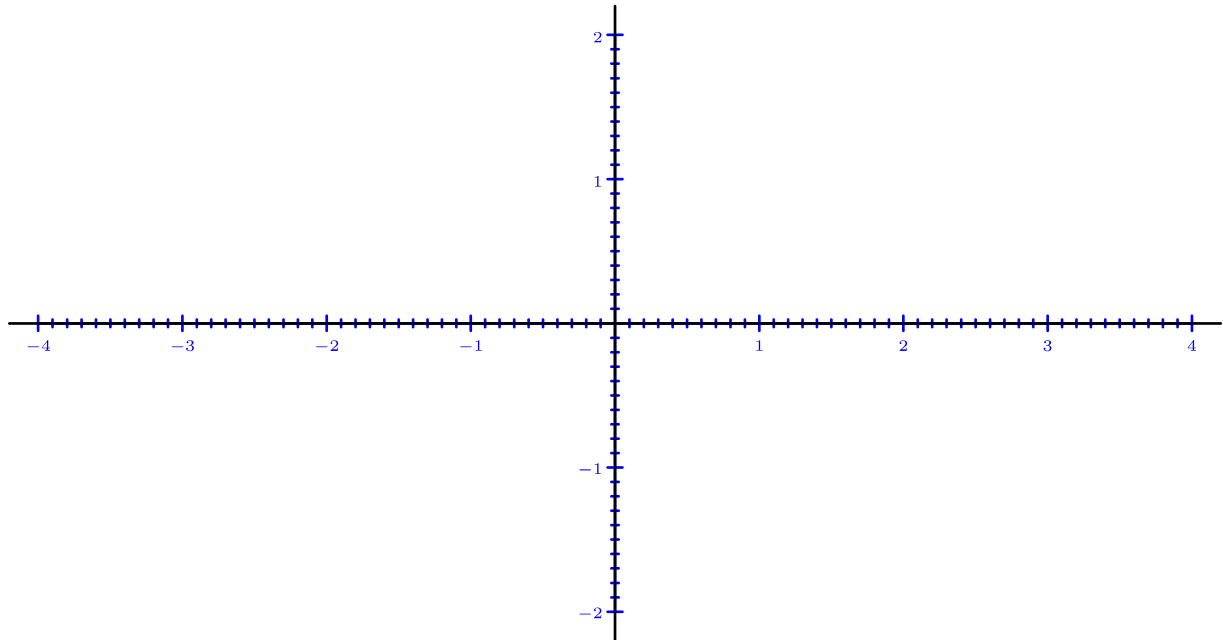


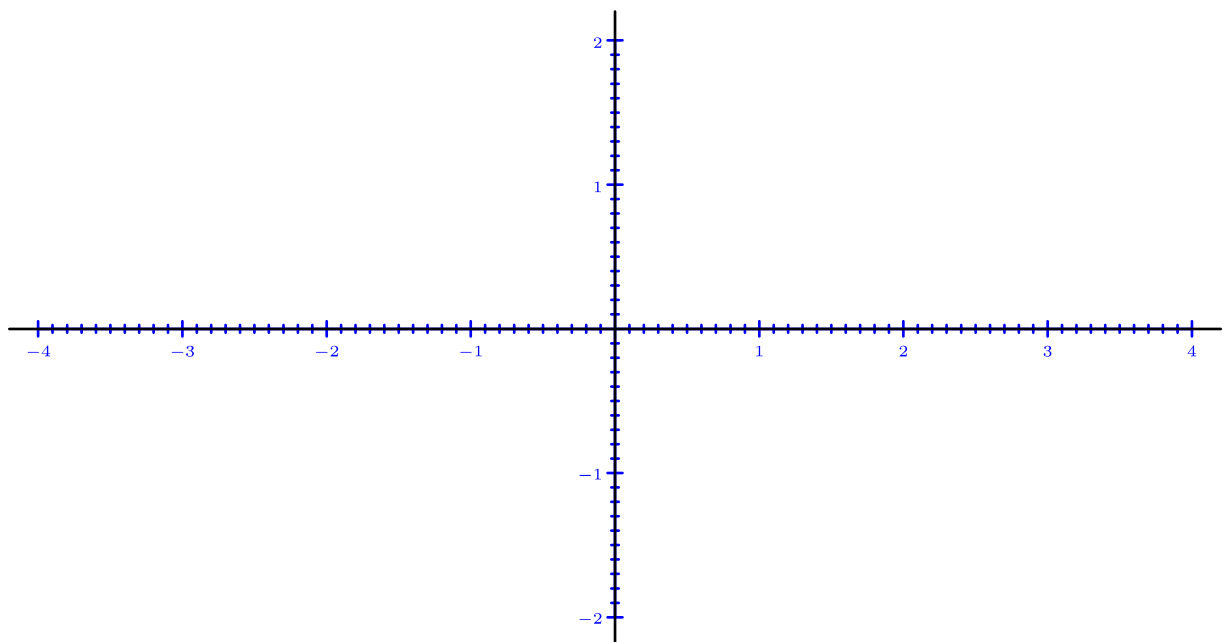
Enunciados

Representa gráficamente los puntos propuestos en cada ejercicio. Señala únicamente los puntos y sus nombres.

①	$A = (3,8;1,9)$	$B = (-1,6;1,2)$	$C = (-2,1;-1,7)$	$D = (3,5;-0,5)$	$F = (3,4;0)$
	$G = (0;1,5)$	$H = (-2,8;0)$	$I = (0;-1,6)$	$J = (2,2;0,9)$	$K = (-3,5;1,3)$
	$L = (-3,3;-0,3)$	$M = (1,4;-1,2)$	$Q = (0,7;1)$	$R = (-3,9;1,8)$	$T = (-3,6;-1,9)$

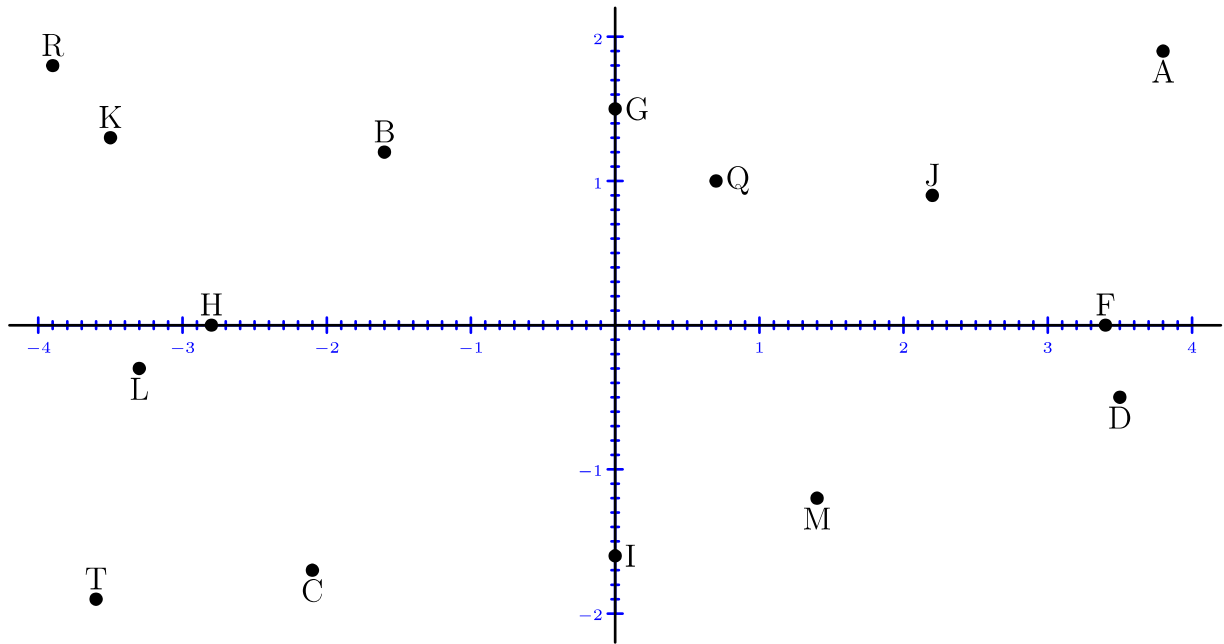


②	$A = (0,8;0,9)$	$B = (-1;-1,7)$	$C = (-3,1;1,9)$	$D = (2,5;-1,5)$	$F = (3;0,2)$
	$G = (3,7;-1,5)$	$H = (-3,8;0)$	$I = (1,3;-0,6)$	$J = (-2;0,4)$	$K = (-3,2;-1)$
	$L = (2,3;1,4)$	$M = (-1,4;1,6)$	$Q = (0;-1,2)$	$R = (1,9;-1,3)$	$T = (3,9;1,7)$



Soluciones

①



②

